

**OXFORD CAMBRIDGE AND RSA EXAMINATIONS
AS LEVEL
H157/01
PHYSICS B (ADVANCING PHYSICS)
Foundations of physics
TUESDAY 15 MAY 2018:
Morning
TIME ALLOWED: 1 hour 30 minutes
plus your additional time allowance
MODIFIED ENLARGED 24pt**

First name						Last name				
Centre number						Candidate number				

YOU MUST HAVE:
**the Data, Formulae and Relationships
Booklet**

YOU MAY USE:
a scientific or graphical calculator
a ruler (cm/mm)

READ INSTRUCTIONS OVERLEAF



INSTRUCTIONS

Use black ink. HB pencil may be used for graphs and diagrams.

Complete the boxes on the front page with your name, centre number and candidate number.

Answer ALL the questions.

Write your answer to each question in the space provided. If additional space is required, use the lined page(s) at the end of this booklet. The question number(s) must be clearly shown.

INFORMATION

The total mark for this paper is 70.

The marks for each question are shown in brackets [].

SECTION A

You should spend a maximum of 25 minutes on this section.

Answer ALL the questions.

Write your answer to each question in the box provided.

1 Which of the following correctly describes ceramic materials? [1]

A ductile

B plastic

C stiff

D tough

Your answer

2 The sum of the currents entering a junction is equal to the sum of the currents leaving the junction.

This is the principle of conservation of which quantity? [1]

A charge

B energy

C mass

D momentum

Your answer

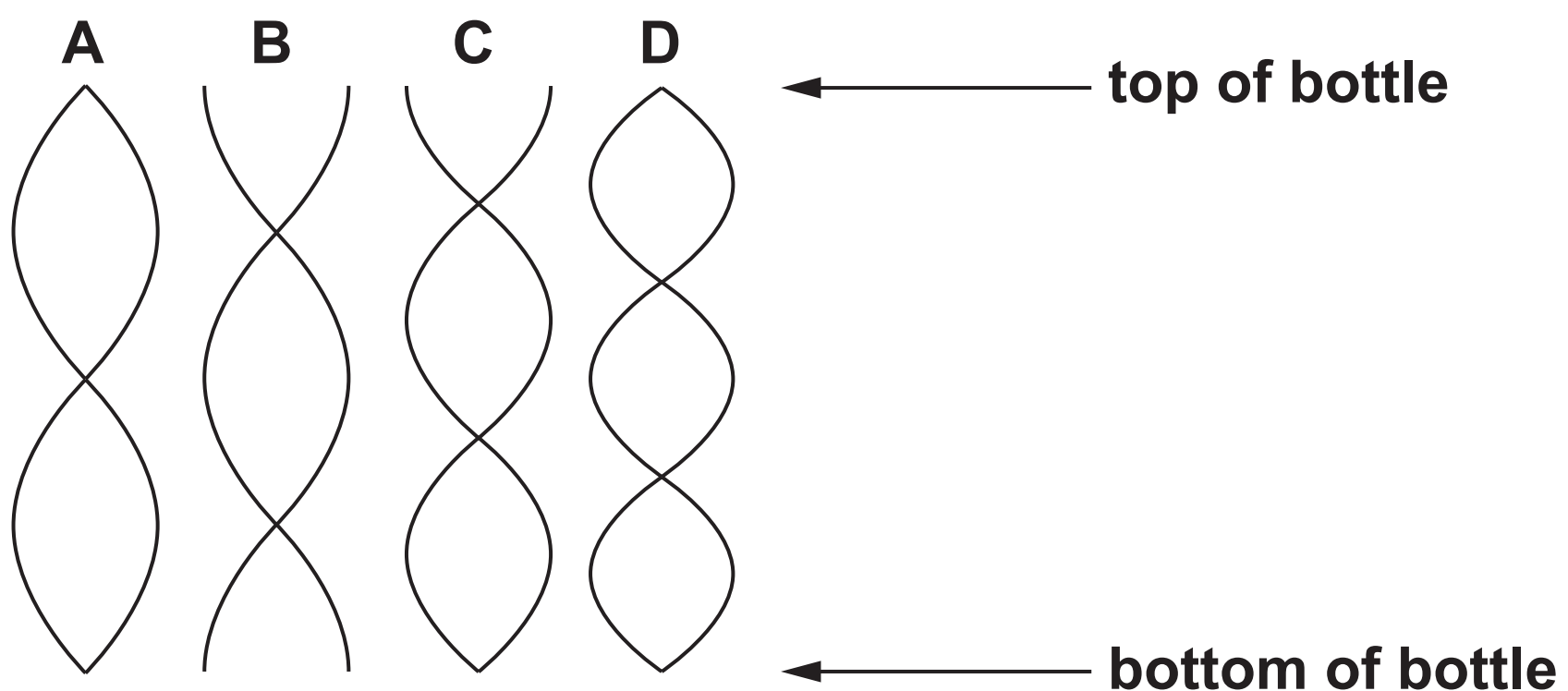
3 Which of these statements about metals is NOT correct? [1]

- A They have a high number density of charge carriers.**
- B They have directional bonds between the metal ions.**
- C They have mobile dislocations.**
- D Pure metals are usually ductile.**

Your answer

4 A student blows across the open top of an empty bottle.

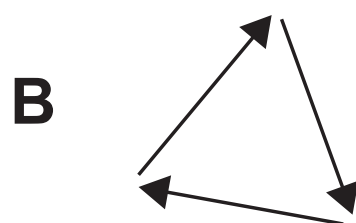
Which diagram represents a standing wave that can be produced in the air in the bottle? [1]



Your answer

- 5 Monochromatic light passes through 3 closely spaced parallel slits at a point. A maximum is produced at a point on a distant screen where the phase difference between light from successive slits is π radians.

Which phasor diagram represents the constructive interference at this point? [1]



Your answer

☐

- 6 Light can be modelled as a wave or as particles (photons).

Which one of these phenomena can ONLY be explained if light is made of photons? [1]

A diffraction

B photoelectric effect

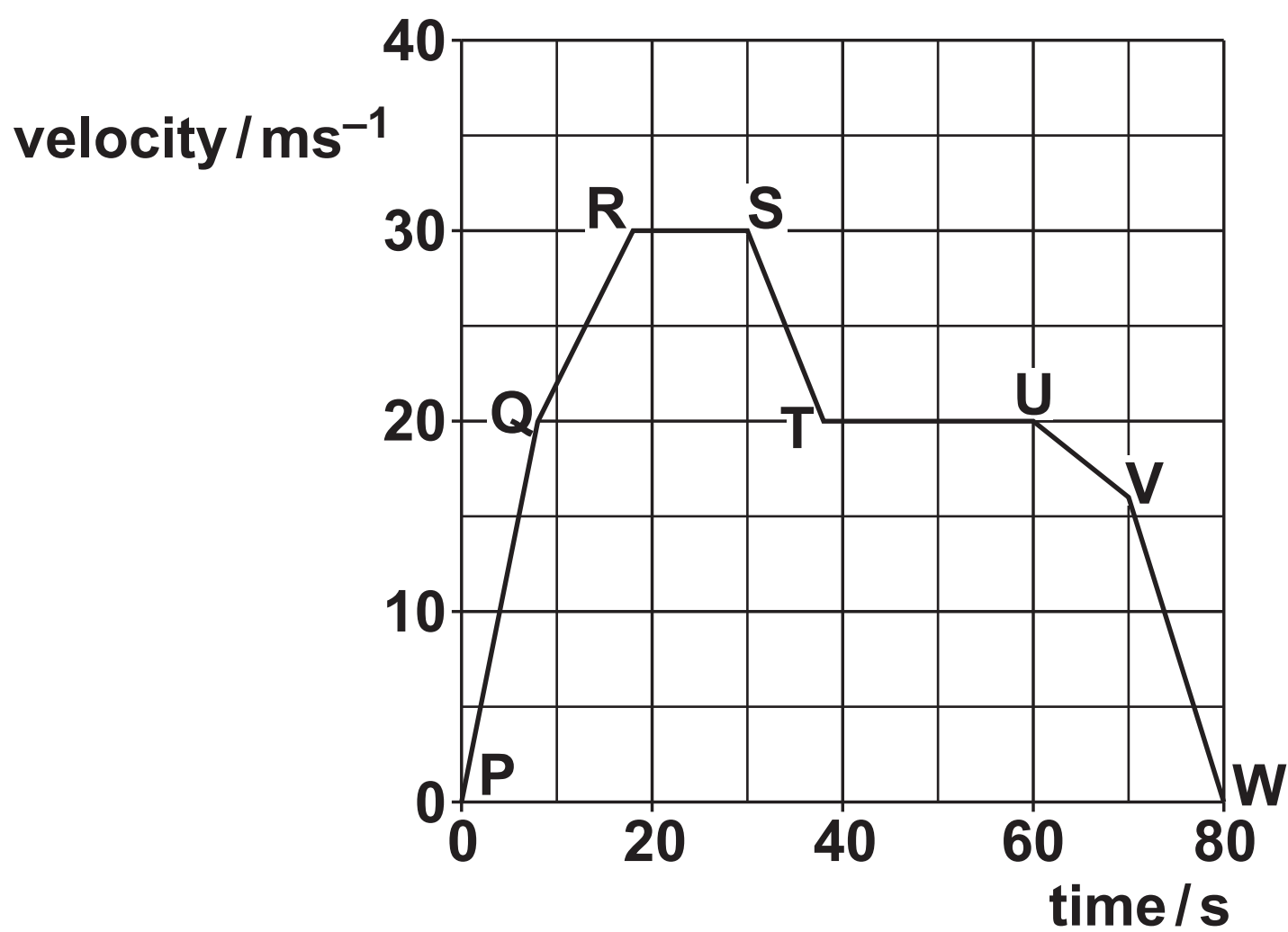
C polarisation

D reflection

Your answer

☐

7 Here is a velocity-time graph for a car.



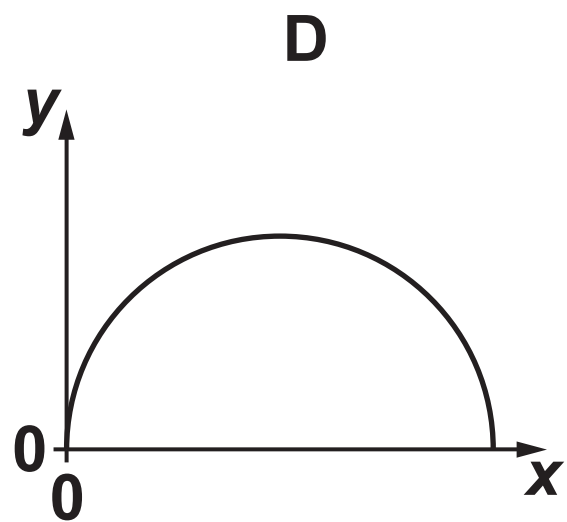
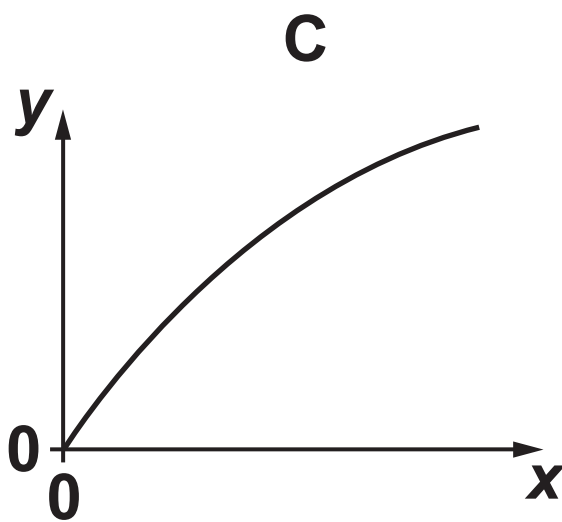
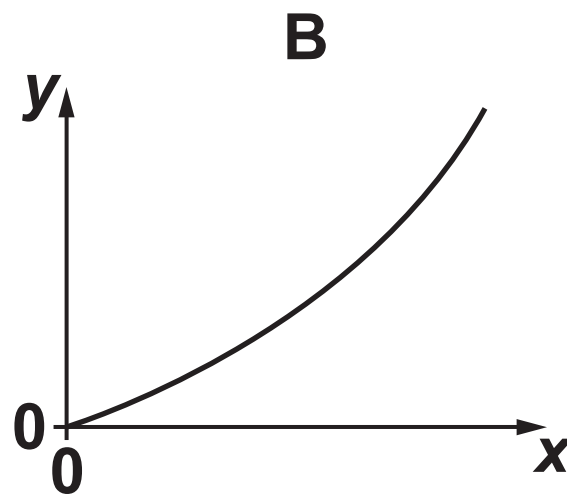
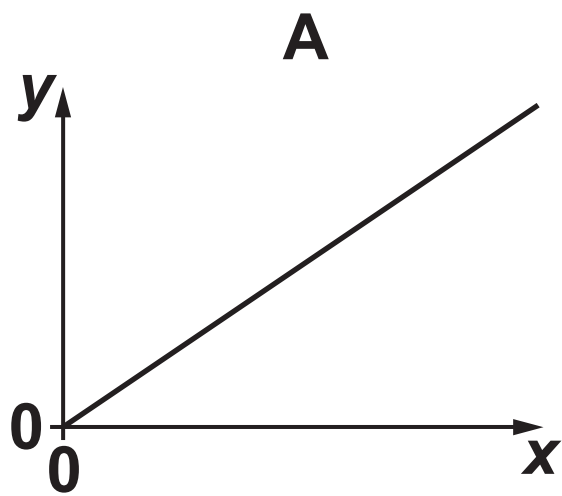
Between which points does the car have the largest acceleration? [1]

- A P and Q
- B Q and R
- C S and T
- D V and W

Your answer

8 An object falls freely from rest.

Which graph represents distance fallen (y -axis) against time (x -axis)? [1]



Your answer

9 There is a current of 5.0 mA in a 250Ω resistor for 40 minutes.

How much energy is dissipated in the resistor? [1]

A $2.5 \times 10^{-6} \text{ J}$

B $1.5 \times 10^{-4} \text{ J}$

C 0.25 J

D 15 J

Your answer

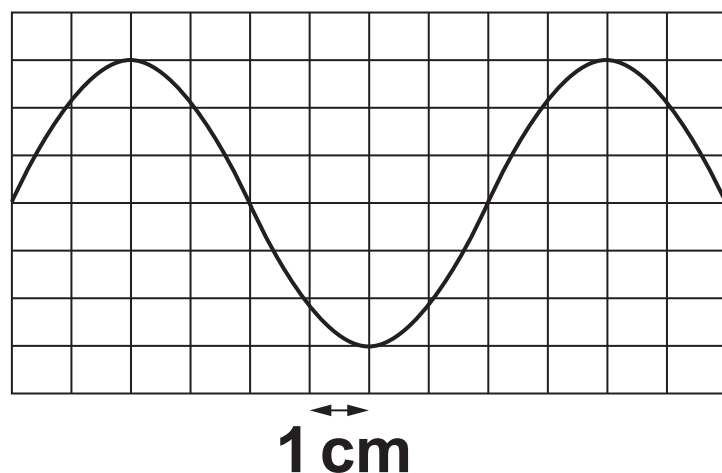
- 10 Light of wavelength 650 nm is incident at right angles on a diffraction grating with 300 lines per mm.

What is the angle of the third-order maximum? [1]

- A 4°
- B 11°
- C 34°
- D 36°

Your answer

- 11 The oscilloscope trace shows the variation in p.d of a signal. The time base of the oscilloscope is set at 0.25 ms cm^{-1} .



What is the frequency of the signal? [1]

- A 333 Hz
- B 500 Hz
- C 1000 Hz
- D 5000 Hz

Your answer

12 A converging lens produces a focused image at a distance of 0.40 m from the lens. The magnification of the image is 2.0.

What is the power of the lens? [1]

A 0.13 D

B 0.20 D

C 5.0 D

D 7.5 D

Your answer

13 The power of a beam of light is 3.5 mW. The wavelength is 445 nm.

How many photons are emitted each second? [1]

A 8×10^{15}

B 8×10^{18}

C 8×10^{21}

D 8×10^{24}

Your answer

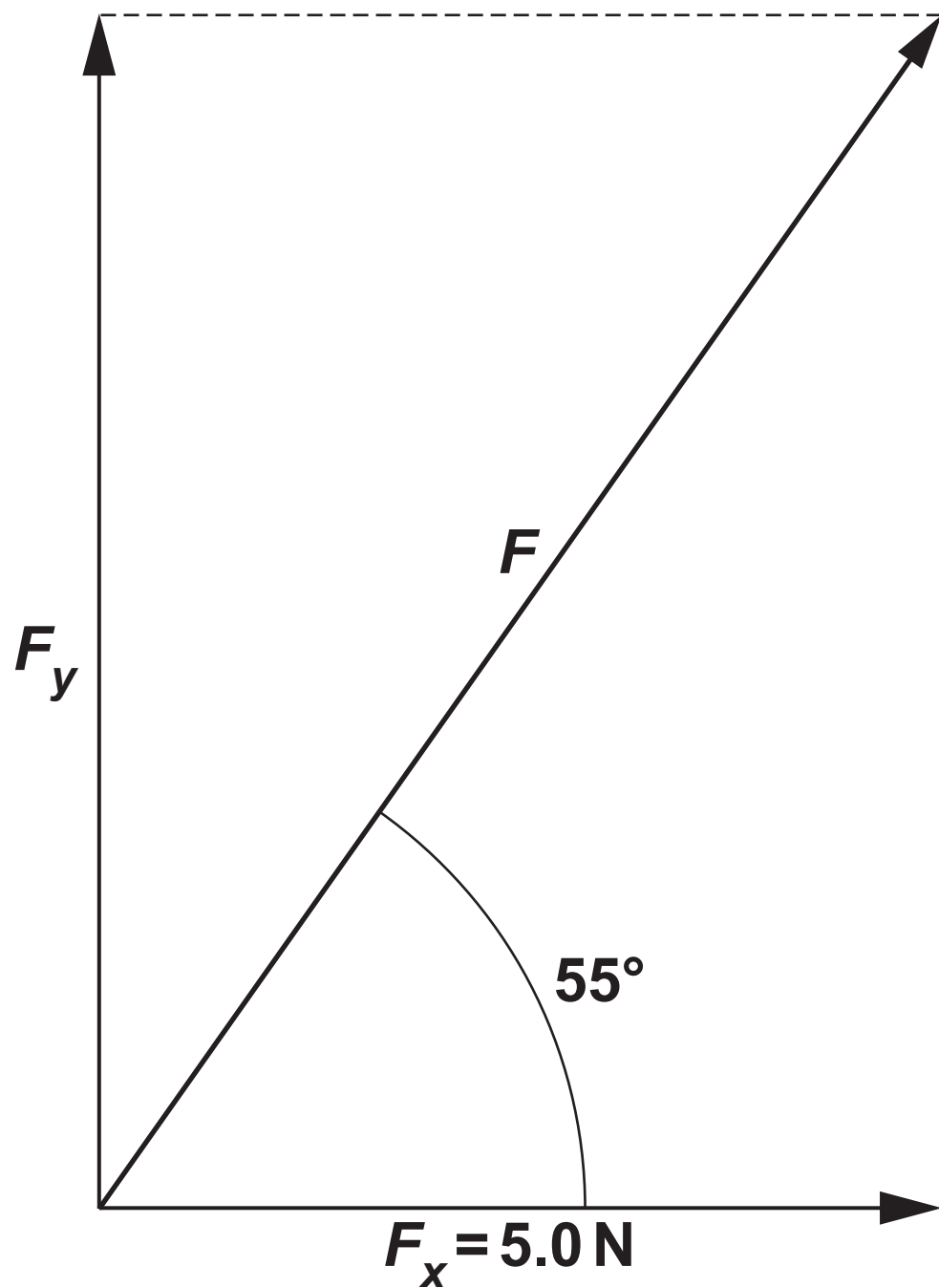
- 14 A ball of mass 0.12 kg falls vertically from rest and bounces. The collision with the ground is ELASTIC, so kinetic energy is conserved. The duration of the collision is 0.040 s, and the ball leaves the ground with a speed of 10 m s^{-1} .**

What is the average resultant force on the ball while it is in contact with the ground? [1]

- A 0 N**
- B 1.2 N**
- C 30 N**
- D 60 N**

Your answer

- 15 A force vector, F , is resolved into a vertical component F_y and a horizontal component F_x . The diagram is not to scale.

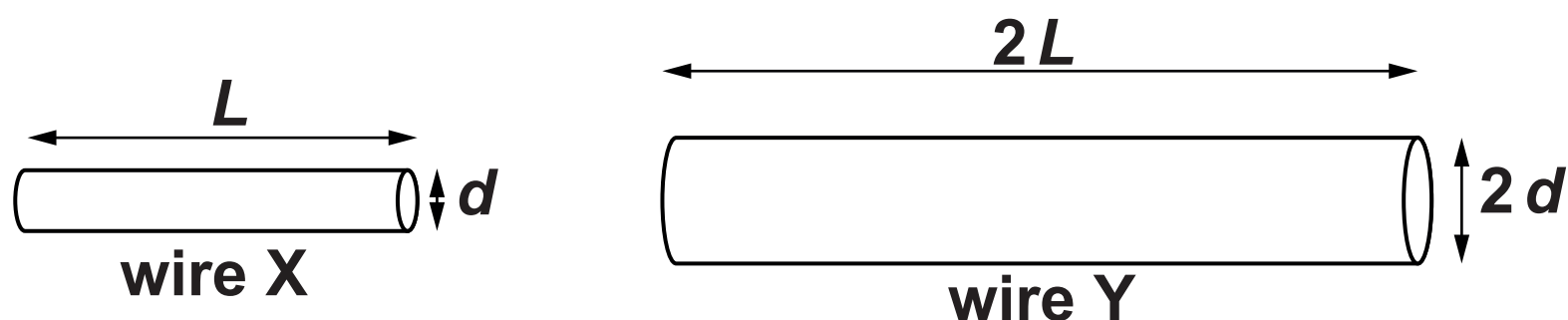


What is the magnitude of F_y ? [1]

- A 2.9 N
- B 3.5 N
- C 7.1 N
- D 8.7 N

Your answer

- 16 Two wires of the same material have the dimensions shown in the diagram.



What is the ratio $\frac{\text{conductance of wire X}}{\text{conductance of wire Y}}$? [1]

- A $\frac{1}{2}$
- B 1
- C $\sqrt{2}$
- D 2

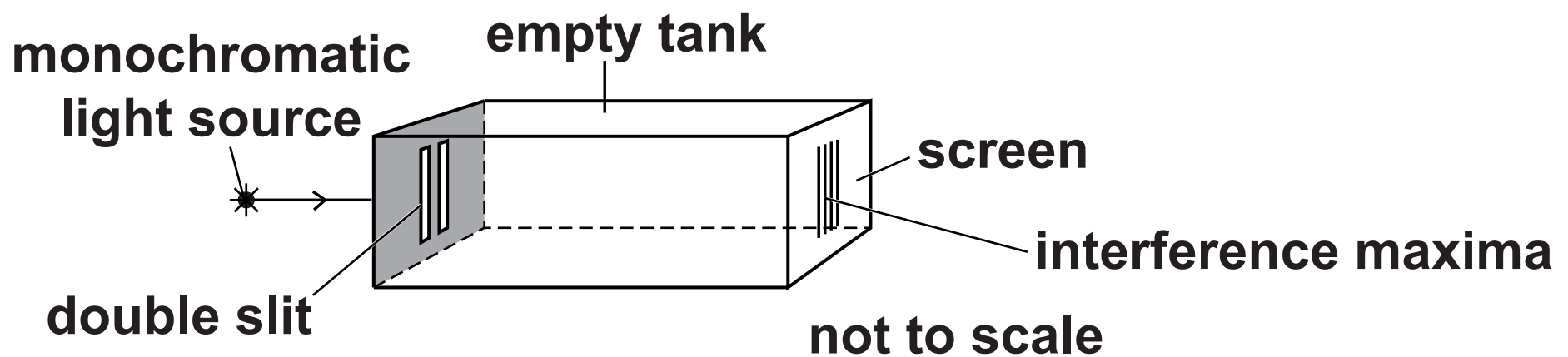
Your answer

- 17 The de Broglie wavelength of an electron with kinetic energy 900 eV is 4.1×10^{-11} m. What is the wavelength of an electron with kinetic energy 450 eV? [1]

- A 2.0×10^{-11} m
- B 2.9×10^{-11} m
- C 5.8×10^{-11} m
- D 8.2×10^{-11} m

Your answer

18 This experiment produces an interference pattern on the screen.



The tank is filled with water, and the maxima become closer together. Which statement correctly explains this observation in terms of the behaviour of light inside the tank? [1]

- A The refractive index of the water is lower than that of air.**
- B The wavelength of the light has decreased.**
- C The time taken for the light to travel from the slits to the screen has decreased.**
- D The light waves from the slits are no longer coherent.**

Your answer

☐

The following information is for use in questions 19 and 20.

Two moving objects, X and Y collide and then move off together.



X: mass = 2.0 kg
speed = 3.0 m s⁻¹

Y: mass = 1.0 kg
speed = 3.0 m s⁻¹

19 What is the total initial kinetic energy (E_k) and momentum (p) of X and Y? [1]

	TOTAL INITIAL E_k	TOTAL INITIAL p
A	4.5 J	3 N s
B	4.5 J	9 N s
C	13.5 J	3 N s
D	13.5 J	9 N s

Your answer ☐

20 What is the total final kinetic energy (E_k) and momentum (p) of X and Y, as they move off together? [1]

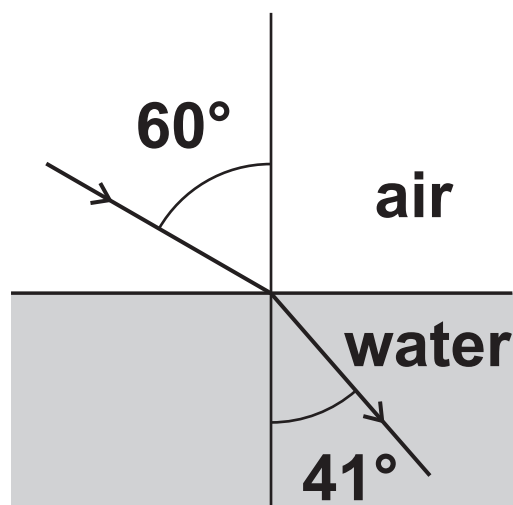
	TOTAL FINAL E_k	TOTAL FINAL p
A	1.5 J	3 N s
B	1.5 J	9 N s
C	4.5 J	3 N s
D	4.5 J	9 N s

Your answer ☐

SECTION B

- 21 Fig. 21 shows a ray of orange light being refracted at an air-water boundary.

Fig. 21



- (a) Show that the refractive index n of the water is less than 1.4 using the angles shown on Fig. 21.

$$n = \underline{\hspace{4cm}} [2]$$

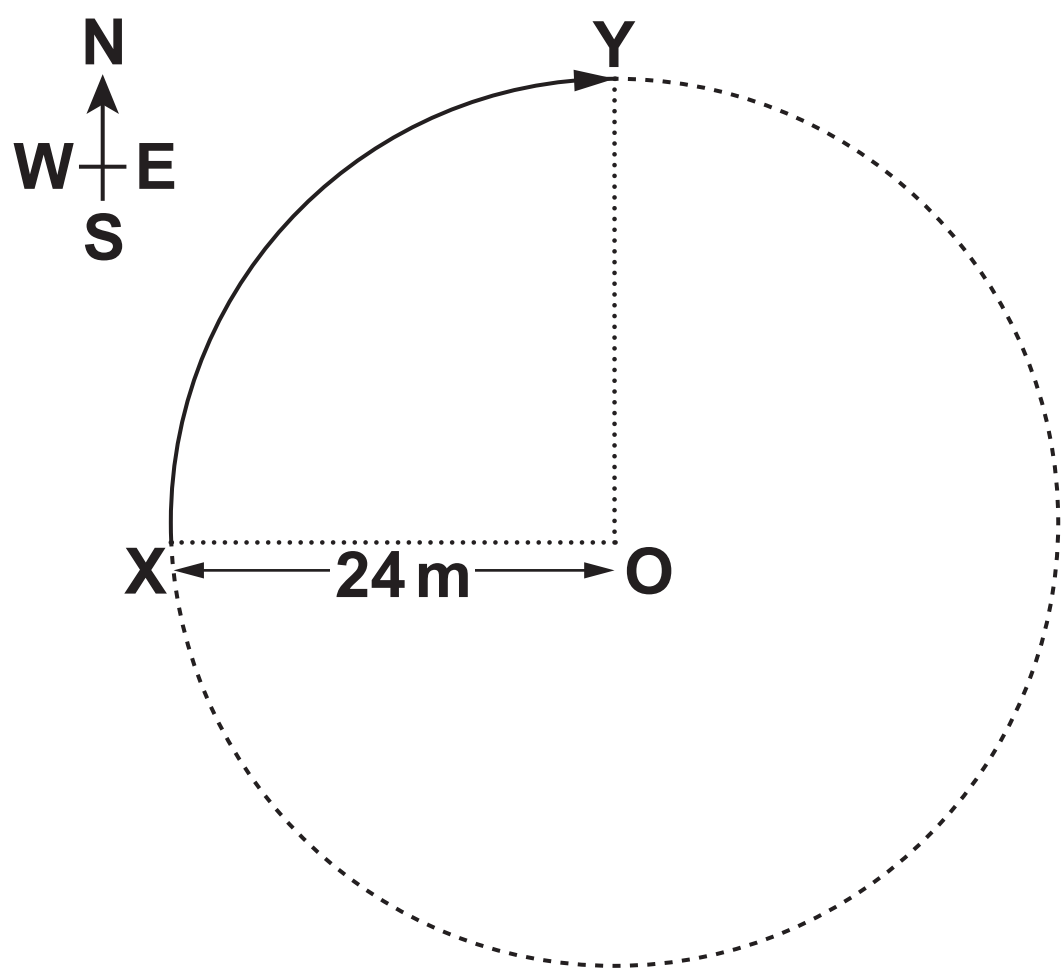
- (b) The refractive index of water for violet light is 0.02 more than the refractive index for the orange light calculated in (a).

State and explain any changes in refraction when violet light enters water at the same angle of incidence of 60° .

[2]

22 Tom runs on the circular track of radius 24 m shown in Fig. 22. He starts at point X and stops at point Y, which is one-quarter of the way around the track.

Fig. 22



Calculate Tom’s **DISPLACEMENT** from X to Y. Show your working.

magnitude _____ m

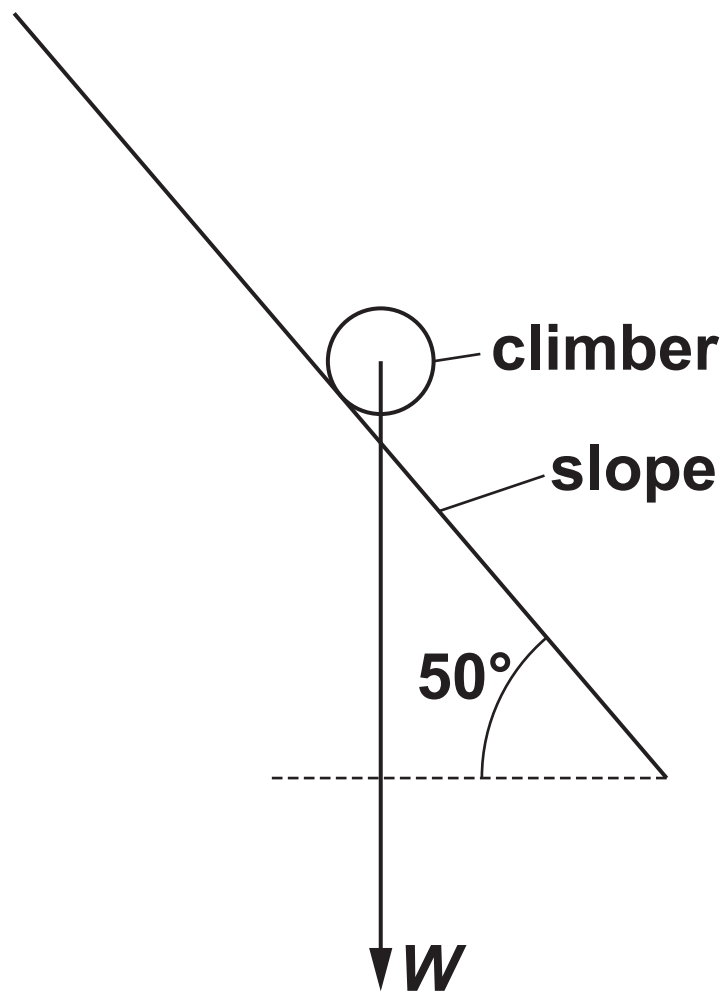
direction _____

[3]

23 Forces can be resolved into components.

- (a) Fig. 23 shows a weight vector W acting on a climber on an ice slope.
The slope is at 50° to the horizontal.

Fig. 23



Add to Fig. 23 two vector arrows to show the components of W , parallel to and perpendicular to the slope.

Your diagram should show that the components add up to make the W vector. [1]

(b) The climber of weight $W = 600\text{ N}$ is held in equilibrium by a rope parallel to the slope.

Calculate the magnitude of the tension in the rope.

magnitude of tension = _____ N [2]

24 A sound system records signal frequencies from 200 Hz up to 11.5 kHz.

The sound is to be digitally sampled.

(a) State the minimum rate of sampling that should be used.

minimum sampling rate = _____ Hz [1]

(b) In this system

the $\frac{\text{total signal variation (including noise)}}{\text{noise variation}}$ = 3000.

Calculate the number of bits that should be used per sample for this system.

number = _____ bits [2]

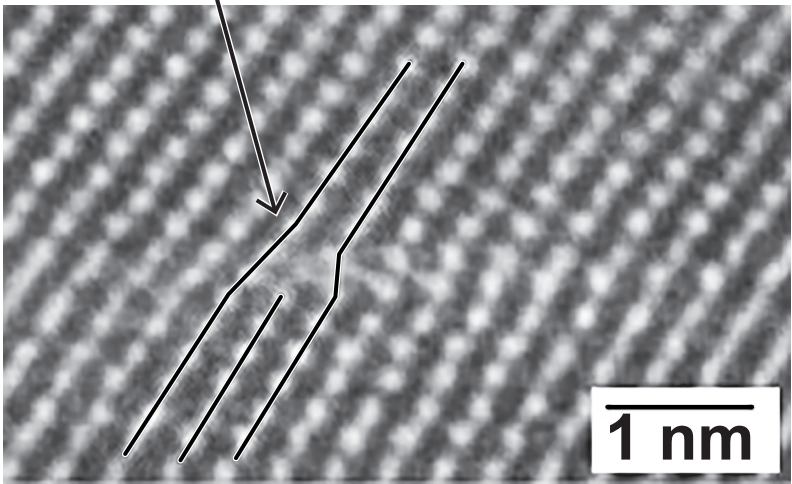
BLANK PAGE

25 Fig. 25.1 shows a transmission electron microscope (TEM) image of a metal from the year 2010 with a scale marker of 1 nm.

Fig. 25.2 shows the approximate resolution of TEM technology against time.

Fig. 25.1

lines of atoms



pattern of atoms

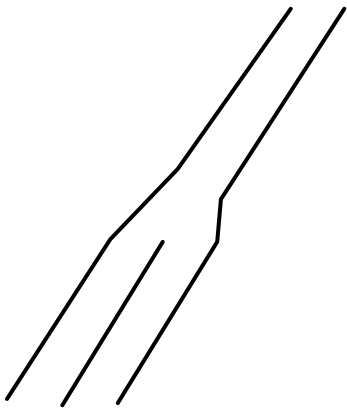
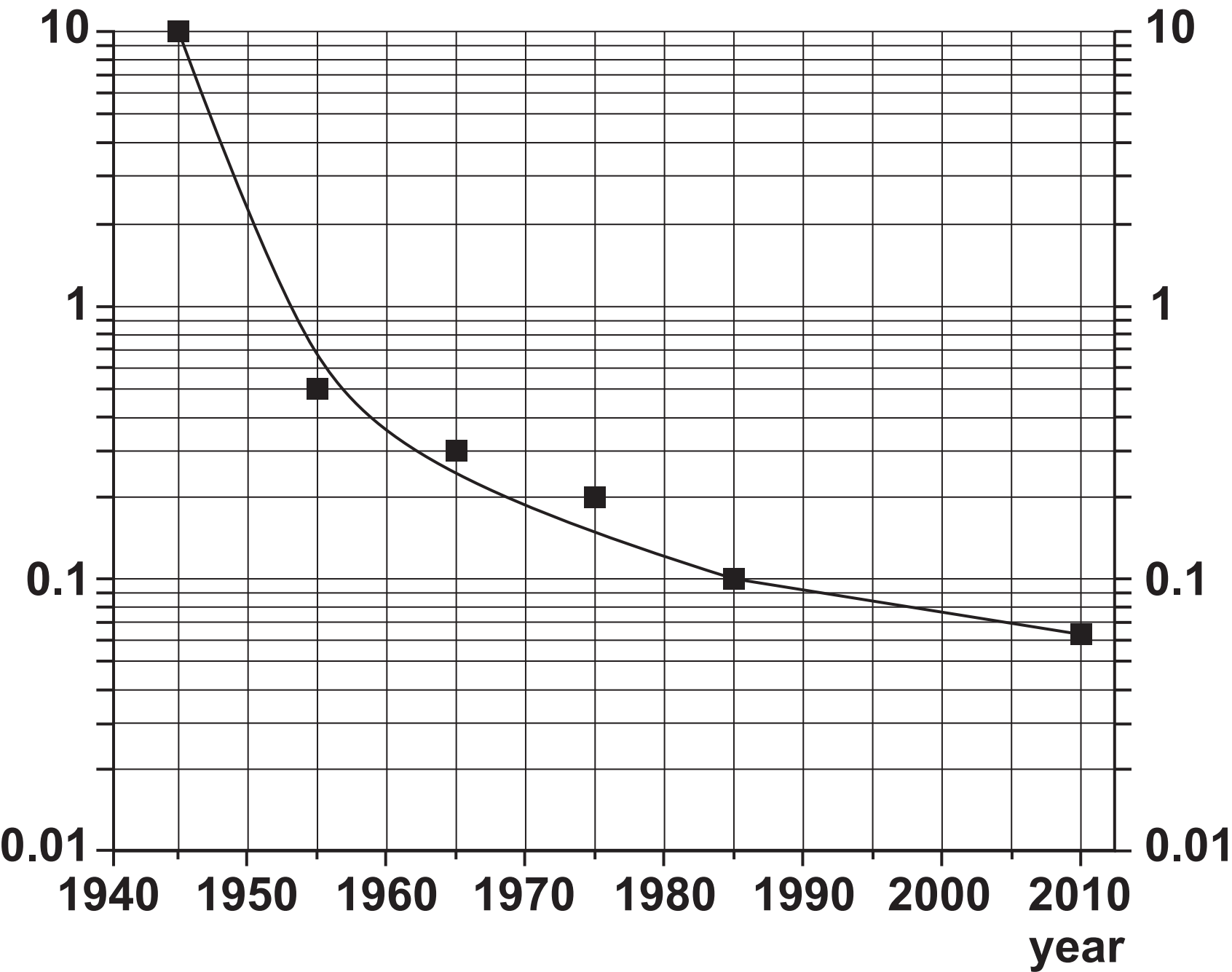


Fig. 25.2

TEM resolution / nm

TEM resolution / nm



- (a) Name the feature represented by the lines of atoms added to the image in Fig. 25.1.

name of feature _____ [1]

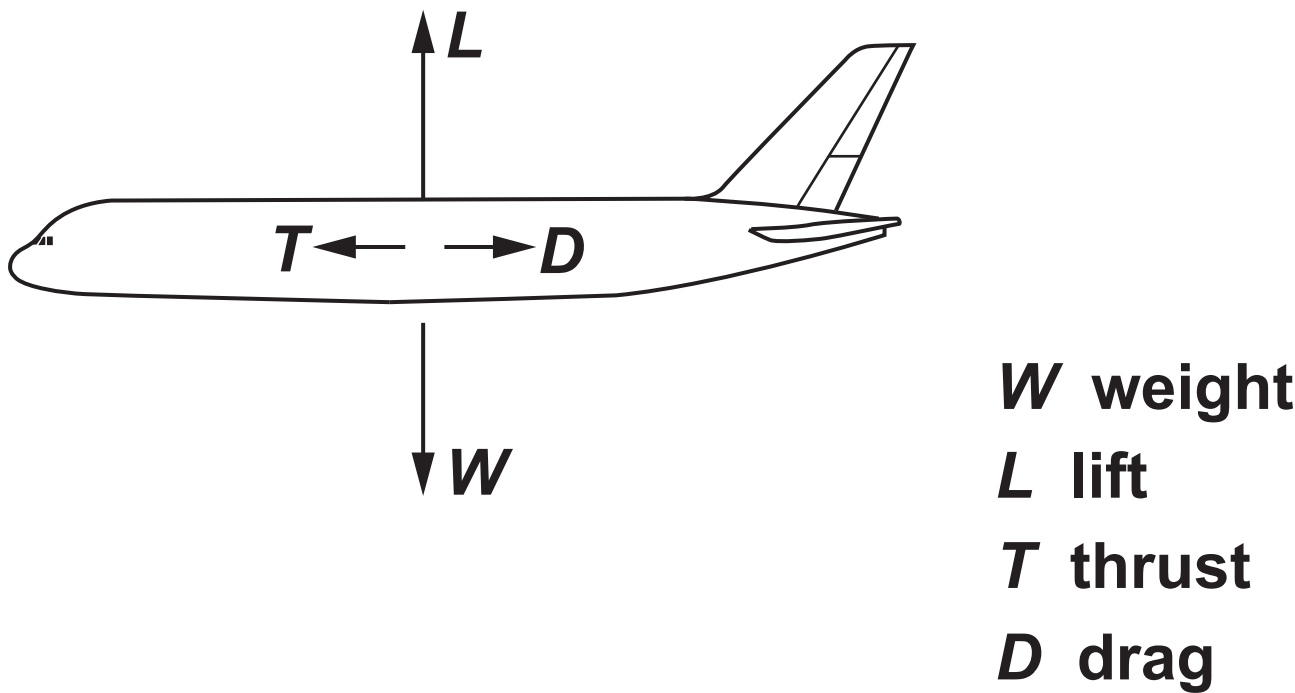
- (b) Using Fig. 25.2 determine the factor by which TEM resolution has improved between the years 1945 and 2010.

factor = _____ [1]

26 This question applies Newton’s laws of motion to a test flight of an aircraft.

The test flight starts with straight level flight at constant velocity. Fig. 26 shows the four initial forces acting on the aircraft.

Fig. 26



The lift force L depends on the velocity v of the aircraft – as v increases, L also increases.

(a) One student has an incorrect interpretation of this diagram.

‘This is an example of Newton’s Third Law – Action and reaction are equal and opposite.

L and W are equal and opposite, and T and D are also equal and opposite.’

Using ONE of the two pairs of forces she mentions (L and W OR T and D), explain why she is wrong.

[2]

- (b) The engines are stopped and the thrust T becomes zero. The aircraft continues flying.

Explain, using Newton's Laws, how the aircraft will move once the engines have been stopped.

[2]

- (c) The mass of the aircraft when its engines are stopped is $4.0 \times 10^5 \text{ kg}$ and the drag D is 1.2 MN .


Calculate the deceleration of the aircraft just after the engines are stopped.

deceleration = _____ ms^{-2} [1]

SECTION C

- 27** The Cassini-Huygens spacecraft took images of Saturn's moon Enceladus when the spacecraft was about 6000 km from Enceladus. One such image is shown in Fig. 27.1.

Fig. 27.1



- (a) (i)** The image is 1024×711 pixels. The original data transmitted for this image was 5.8 Mbits.

Calculate the number of bits per pixel in the original data.

bits per pixel = _____ [1]

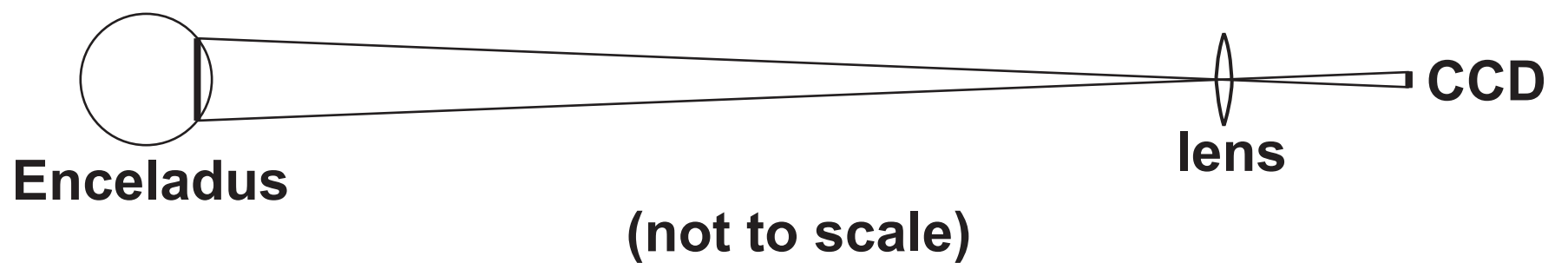
- (ii) The 5.8 Mbits was downloaded to an Earth receiver at a rate of 110 kbit s^{-1} .
Calculate the time taken to download this data.

time taken = _____ s [1]

- (b) (i) Two radii of the moon Enceladus have been added to Fig. 27.1. The resolution of the image is 330 m per pixel.
Show that the diameter of Enceladus is less than 500 km. [3]

- (ii) The image was taken with a sensor of square pixels of width $5\mu\text{m}$. Fig. 27.2 shows the formation of this image (not to scale).

Fig. 27.2



Estimate the focal length of the camera lens that produced the image using data from earlier in the question.

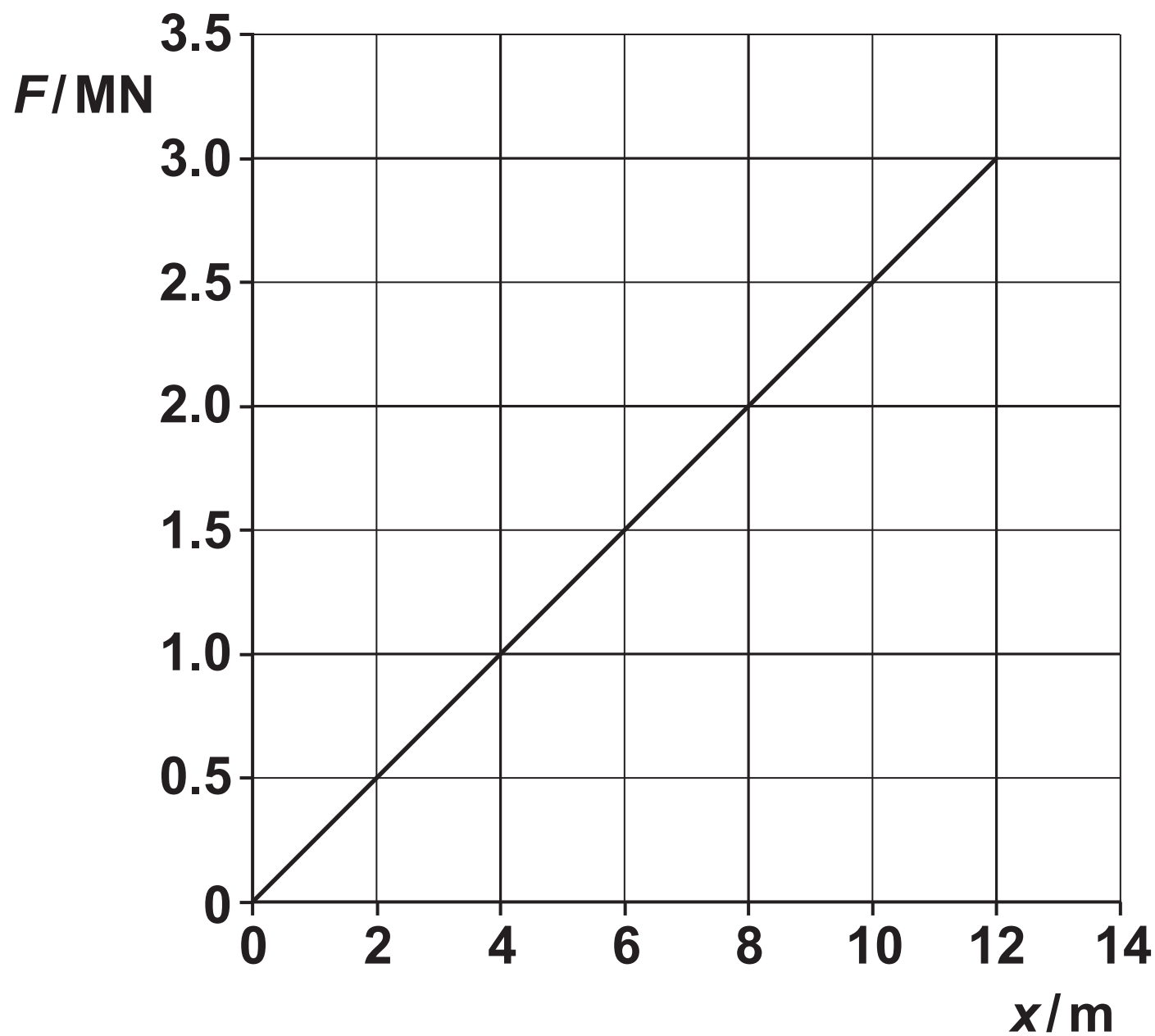
Make your method clear.

focal length = _____ m [2]

BLANK PAGE

28 This question is about a high-tensile steel cable used by a tugboat to tow large ships. Fig. 28 shows the force F against extension x graph for the steel cable up to the breaking point.

Fig. 28



(a) (i) Calculate the force constant $k = \frac{F}{x}$ in MN m^{-1} for this cable.

force constant $k =$ _____ MN m^{-1} [1]

- (ii) Use algebraic reasoning to show that the force constant k is related to the Young modulus E of the steel by the equation:

$$k = \frac{E A}{L}$$

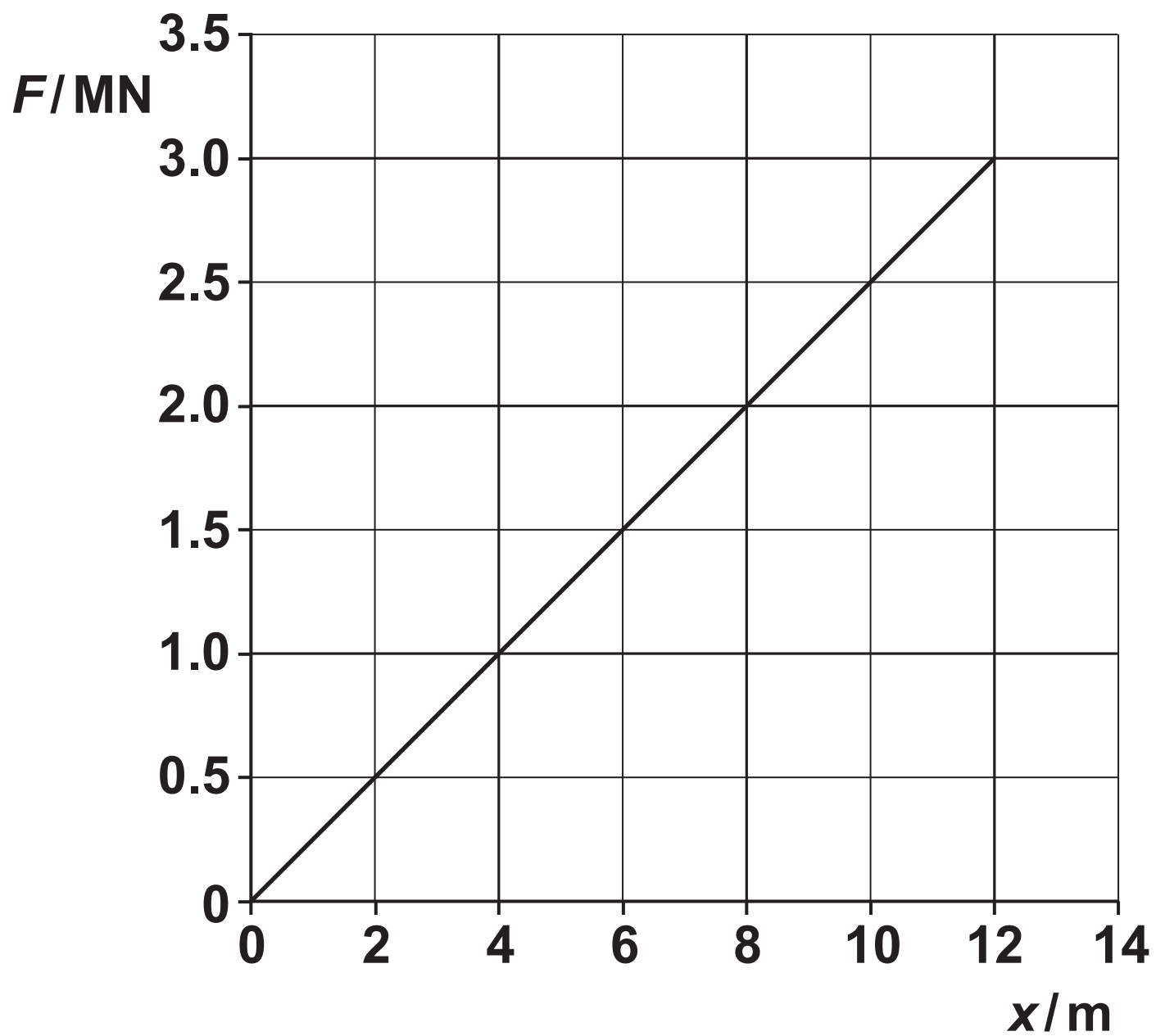
where A is the cross-sectional area of cable and L is the length of cable. Use the space below. [1]

- (iii) For the cable in the graph, $E = 2.1 \times 10^{11}$ Pa and $A = 1.0 \times 10^{-3} \text{ m}^2$.

Calculate the length L of the cable used.

$L =$ _____ m [2]

Here is a copy of Fig. 28.



- (b) (i) Use Fig. 28 to show that the elastic potential energy stored by the cable at its breaking point is less than 20 MJ. Use the space below. [1]

(ii) When a cable breaks, most of its stored elastic energy is transferred to kinetic energy.

Estimate the speed that the cable would reach, assuming all its mass moves at the same speed.

density, $\rho = \frac{\text{mass}}{\text{volume}} = 7.9 \times 10^3 \text{ kg m}^{-3}$ for steel

speed = _____ m s^{-1} [3]

29 This question is about a temperature sensor.

It contains a thermistor in a potential divider circuit as shown in Fig. 29.1.

Fig. 29.2 shows the output p.d. V against temperature θ graph for the sensor.

Fig. 29.1

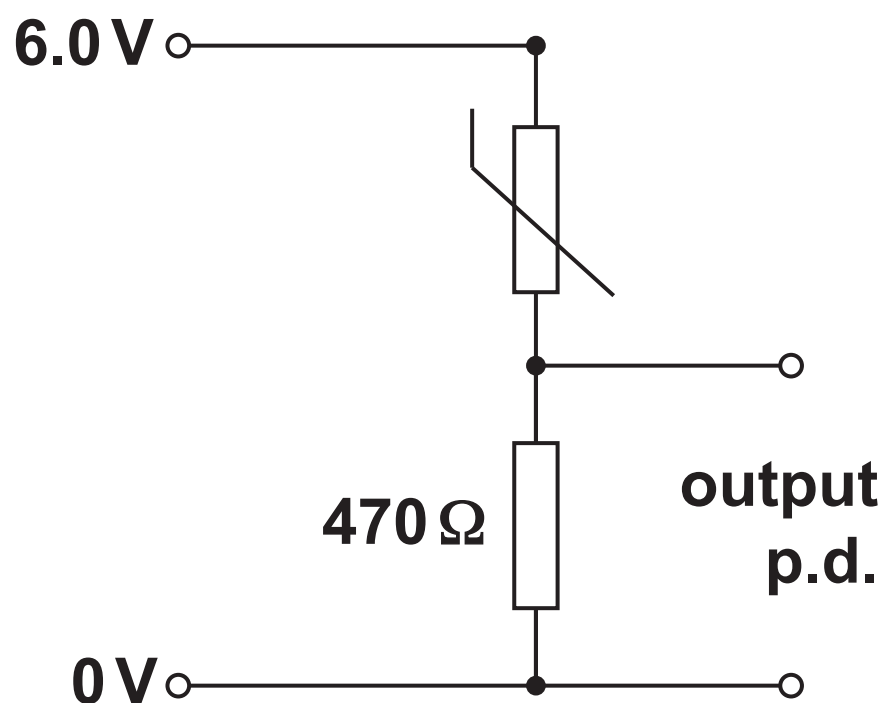
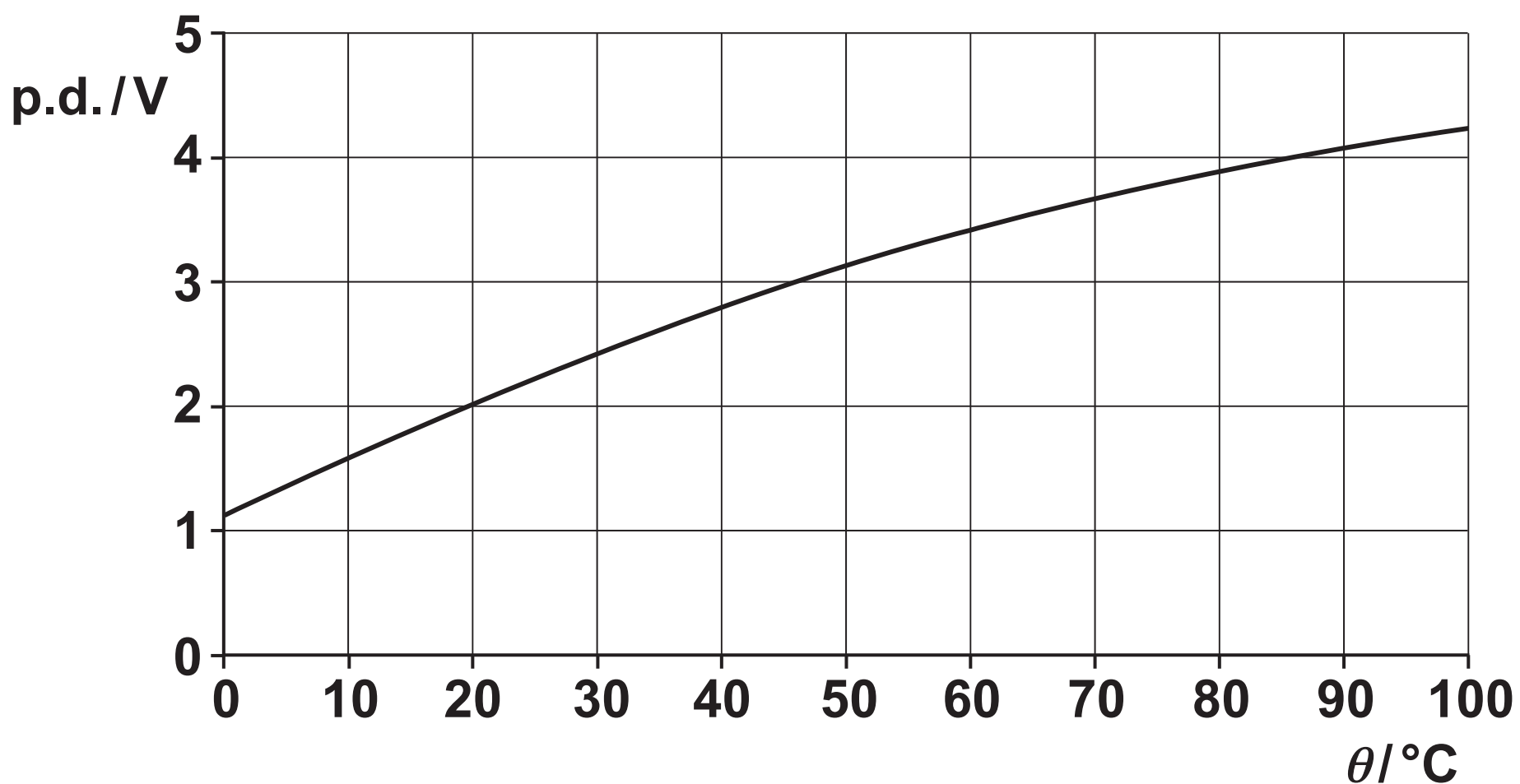


Fig. 29.2



- (a) State suitable apparatus (other than indicated in Fig. 29.1) and describe how to use it to obtain the calibration graph shown in Fig. 29.2.
You may wish to include a labelled diagram in your answer.**

[4]

- (b) The p.d. across the terminals of the power supply is 6.0 V and the resistance of the fixed resistor in the potential divider is $470\ \Omega$.

Calculate the resistance of the thermistor at 46°C . Make your reasoning clear.

resistance = _____ Ω [2]

- (c) (i) The sensitivity of the sensor is the ratio
change of output p.d.
change in temperature'

Describe how the sensitivity of the sensor varies between 0 °C and 100 °C. Explain your reasoning.

[2]

- (ii) Use Fig. 29.2 to estimate the sensitivity of the sensor at 50 °C.
Make your method clear.

sensitivity = _____ V °C⁻¹ [3]

(d) The readings of p.d. for Fig. 29.2 were taken with a digital voltmeter.

Five consecutive values were recorded at each temperature.

The calculated mean output p.d. data for five of the temperatures are shown in the table with calculated uncertainty values.

temperature / °C		0	20	40	60	100
output p.d. / V	mean	1.127	2.041	2.795	3.389	4.097
	uncertainty	±0.003	±0.024	±0.020	±0.012	±0.003

Analyse and comment on the uncertainties in the data in the table.

Suggest a cause of the limitations in the data and what might be done to improve the procedure or apparatus used in the calibration to avoid the limitations.

[4

END OF QUESTION PAPER

ADDITIONAL ANSWER SPACE

If additional space is required, you should use the following lined page(s). The question number(s) must be clearly shown in the margin(s).

This image shows a blank sheet of white paper with horizontal ruling lines. A single vertical line runs down the left side, creating a margin. There are 20 horizontal lines in total, evenly spaced across the page. The lines are thin and black.

